



# Multiplication and Division Challenge Cards



twinkl

twinkl.co.uk

# Multiplication and Division Challenge Cards



twinkl

twinkl.co.uk


# Multiplication and Division Challenge Cards



twinkl

twinkl.co.uk

# Multiplication and Division Challenge Cards



twinkl

twinkl.co.uk

How many children are there?



Count in twos.

[twinkl.co.uk](https://www.twinkl.co.uk)

How much money is there?



How many coins are there?

[twinkl.co.uk](https://www.twinkl.co.uk)


Make groups of 5.



How many footballs are there?  
How many groups?

[twinkl.co.uk](https://www.twinkl.co.uk)


**Half Price Sale!**



How much do they cost now?

[twinkl.co.uk](https://www.twinkl.co.uk)

Ben built 7 towers each with 5 bricks.



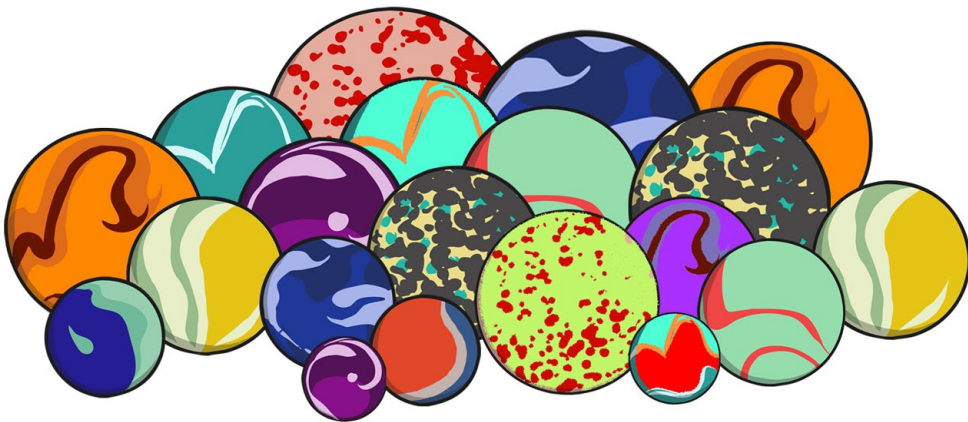
How many bricks has he used?

Count in tens 8 times.


**What is...?**

**8 x 10**

How many 5s are there in 20?



You can see  $\frac{1}{2}$  of my pencils. How many pencils do I have altogether?






I have just eaten half of the cakes.



How many cakes did I eat?

twinkl.co.uk

Can you make up a story about these pigs?



Use times or divide.

twinkl.co.uk

# Multiplication and Division Challenge Cards Answers

<p>1. How many children are there? Count in twos. <i>There are 12 children.</i></p>	<p>2. How much money is there? <i>There is 40p.</i> How many coins are there? <i>There are 4 coins.</i></p>
<p>3. Make groups of 5. How many footballs are there? <i>There are 10 footballs.</i> How many groups? <i>There are two groups.</i></p>	<p>4. Half price sale! How much does the fruit cost now? <i>The fruit now costs 10p, 3p, 5p, 7p and 4p</i></p>
<p>5. Ben built 7 towers each with 5 bricks. How many bricks has he used? <i>Ben has used 35 bricks.</i></p>	<p>6. What is 8 times 10? <i>8 times 10 is 80.</i></p>
<p>7. How many 5s are there in 20? <i>There are four 5s in 20.</i></p>	<p>8. You can see <math>\frac{1}{2}</math> of my pencils. How many pencils do I have altogether? <i>8 pencils.</i></p>
<p>9. I have just eaten half of the cakes. How many cakes did I eat? <i>6 cakes.</i></p>	<p>10. Can you make up a story about these pigs? Use times or divide. <i>There are 5 pigs on one field and 5 in the other, 2 times 5 is 10. 10 pigs divided equally between 2 fields makes 5 in each field.</i></p>